


## Homework Assignment #2—Treble Clef and Bass Clef Due Friday, September 2nd

Name: \_\_\_\_\_

### I. Treble Clef


1. Another name for the treble clef is the...
 

A. C clef	C. Low clef
B. F clef	D. G clef
  
2. The treble clef is used for instruments and voices that tend to be in the **Higher** or **Lower** (circle one) register.
  
3. Provide letter names for each of these notes on the treble staff (C, E, and G only).



\_\_\_\_\_

4. Provide letter names for each of these notes on the treble staff (all natural notes).



\_\_\_\_\_

5. After writing in a treble clef at the far left of this staff, write in closed noteheads for each note requested.



C
a different C
F
E
G
a different G
B
A

### II. Bass Clef

1. Another name for the bass clef is the...
 

A. F clef	C. C clef
B. G clef	D. Middle clef

2. The bass clef is used for instruments and voices that tend to be in the **Higher** or **Lower** (circle one) register.
3. Provide letter names for each of these notes on the bass staff (C, E, and G only).




-----

4. Provide letter names for each of these notes on the bass staff (all natural notes).



-----

5. After writing in a bass clef at the far left of this staff, write in closed noteheads for each note requested.



D

E

B

a different  
B

F

a different  
F

C

a different  
C